

Name _____

Computation Practice

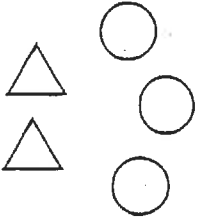
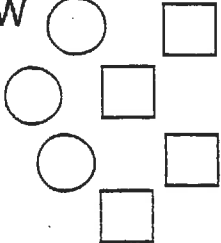
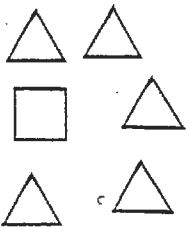

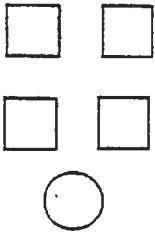
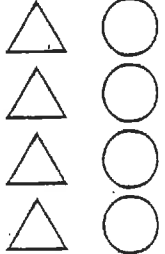

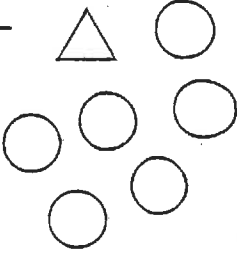
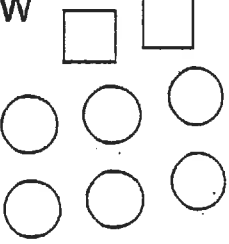
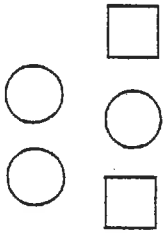
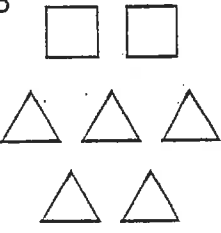
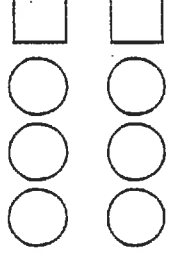
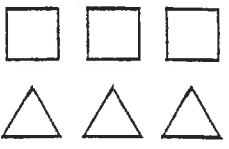
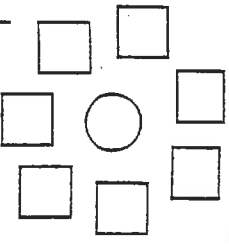
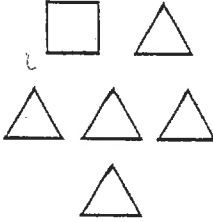
Directions: Read each question carefully. Choose the correct answer and fill in the bubble. Mark NH if the answer is not here.

<p>1</p> $\begin{array}{r} 7 \\ \times 8 \\ \hline \end{array}$ <p> <input type="radio"/> 42 <input type="radio"/> 49 <input type="radio"/> 56 <input type="radio"/> 63 <input type="radio"/> NH </p>	<p>2</p> $\begin{array}{r} 540 \\ +387 \\ \hline \end{array}$ <p> <input type="radio"/> 827 <input type="radio"/> 927 <input type="radio"/> 847 <input type="radio"/> 937 <input type="radio"/> NH </p>	<p>3</p> $\begin{array}{r} 463 \\ -182 \\ \hline \end{array}$ <p> <input type="radio"/> 281 <input type="radio"/> 321 <input type="radio"/> 325 <input type="radio"/> 381 <input type="radio"/> NH </p>
<p>4</p> $\begin{array}{r} 261 \\ +685 \\ \hline \end{array}$ <p> <input type="radio"/> 826 <input type="radio"/> 946 <input type="radio"/> 846 <input type="radio"/> 944 <input type="radio"/> NH </p>	<p>5</p> $\begin{array}{r} 375 \\ +384 \\ \hline \end{array}$ <p> <input type="radio"/> 659 <input type="radio"/> 751 <input type="radio"/> 759 <input type="radio"/> 959 <input type="radio"/> NH </p>	<p>6</p> $\begin{array}{r} 385 \\ +250 \\ \hline \end{array}$ <p> <input type="radio"/> 735 <input type="radio"/> 635 <input type="radio"/> 535 <input type="radio"/> 536 <input type="radio"/> NH </p>
<p>7</p> $\begin{array}{r} 61 \\ \times 9 \\ \hline \end{array}$ <p> <input type="radio"/> 550 <input type="radio"/> 549 <input type="radio"/> 459 <input type="radio"/> 639 <input type="radio"/> NH </p>	<p>8</p> $\begin{array}{r} 255 \\ +493 \\ \hline \end{array}$ <p> <input type="radio"/> 728 <input type="radio"/> 742 <input type="radio"/> 748 <input type="radio"/> 648 <input type="radio"/> NH </p>	<p>9</p> $\begin{array}{r} 570 \\ -143 \\ \hline \end{array}$ <p> <input type="radio"/> 437 <input type="radio"/> 443 <input type="radio"/> 433 <input type="radio"/> 427 <input type="radio"/> NH </p>
<p>10</p> $\begin{array}{r} 857 \\ -329 \\ \hline \end{array}$ <p> <input type="radio"/> 538 <input type="radio"/> 628 <input type="radio"/> 528 <input type="radio"/> 532 <input type="radio"/> NH </p>	<p>11</p> $\begin{array}{r} 893 \\ +26 \\ \hline \end{array}$ <p> <input type="radio"/> 913 <input type="radio"/> 919 <input type="radio"/> 819 <input type="radio"/> 909 <input type="radio"/> NH </p>	<p>12</p> $\begin{array}{r} 79 \\ \times 3 \\ \hline \end{array}$ <p> <input type="radio"/> 232 <input type="radio"/> 102 <input type="radio"/> 237 <input type="radio"/> 217 <input type="radio"/> NH </p>

Name _____

Sick Call

Write the fraction that names the part of the group shown.

<p>I</p>  <p>triangles ____</p>	<p>W</p>  <p>circles ____</p>	<p>E</p>  <p>squares ____</p>	<p>G</p>  <p>triangles ____</p>	<p>T</p>  <p>squares ____</p>
<p>E</p>  <p>circles ____</p>	<p>N</p>  <p>squares ____</p>	<p>L</p>  <p>triangles ____</p>	<p>W</p>  <p>squares ____</p>	<p>S</p>  <p>circles ____</p>
<p>P</p>  <p>triangles ____</p>	<p>H</p>  <p>circles ____</p>	<p>S</p>  <p>squares ____</p>	<p>L</p>  <p>circles ____</p>	<p>A</p>  <p>triangles ____</p>

Why did the orange go to the doctor?

To solve the riddle, write each letter from above on its matching numbered line or lines below.

$\frac{3}{5}$ $\frac{6}{8}$ $\frac{1}{6}$ $\frac{2}{8}$ $\frac{5}{6}$ $\frac{3}{6}$ $\frac{2}{6}$ $\frac{4}{5}$

$\frac{5}{7}$ $\frac{4}{8}$ $\frac{1}{6}$ $\frac{1}{7}$ $\frac{2}{5}$ $\frac{2}{6}$ $\frac{4}{6}$ $\frac{3}{7}$ $\frac{1}{6}$ $\frac{1}{8}$ $\frac{1}{7}$

