


Directions: Read each question carefully. Choose the correct answer and fill in the bubble. Mark NH if the answer is not here.

<p><b>1</b></p> $\begin{array}{r} 3 \\ \times 9 \\ \hline \end{array}$ <p> <input type="radio"/> 12  <input type="radio"/> 18  <input type="radio"/> 24  <input type="radio"/> 27  <input type="radio"/> NH         </p>	<p><b>2</b></p> $\begin{array}{r} 42 \\ \times 9 \\ \hline \end{array}$ <p> <input type="radio"/> 368  <input type="radio"/> 378  <input type="radio"/> 371  <input type="radio"/> 148  <input type="radio"/> NH         </p>	<p><b>3</b></p> $\begin{array}{r} 662 \\ -456 \\ \hline \end{array}$ <p> <input type="radio"/> 206  <input type="radio"/> 214  <input type="radio"/> 246  <input type="radio"/> 106  <input type="radio"/> NH         </p>
<p><b>4</b></p> $\begin{array}{r} 4,321 \\ +2,947 \\ \hline \end{array}$ <p> <input type="radio"/> 7,278  <input type="radio"/> 7,268  <input type="radio"/> 6,268  <input type="radio"/> 6,168  <input type="radio"/> NH         </p>	<p><b>5</b></p> $\begin{array}{r} 986 \\ -595 \\ \hline \end{array}$ <p> <input type="radio"/> 311  <input type="radio"/> 391  <input type="radio"/> 411  <input type="radio"/> 491  <input type="radio"/> NH         </p>	<p><b>6</b></p> $\begin{array}{r} 263 \\ +421 \\ \hline \end{array}$ <p> <input type="radio"/> 784  <input type="radio"/> 694  <input type="radio"/> 684  <input type="radio"/> 682  <input type="radio"/> NH         </p>
<p><b>7</b></p> $\begin{array}{r} 32 \\ \times 2 \\ \hline \end{array}$ <p> <input type="radio"/> 74  <input type="radio"/> 56  <input type="radio"/> 54  <input type="radio"/> 64  <input type="radio"/> NH         </p>	<p><b>8</b></p> $48 \div 4 =$ <p> <input type="radio"/> 12  <input type="radio"/> 14  <input type="radio"/> 24  <input type="radio"/> 22  <input type="radio"/> NH         </p>	<p><b>9</b></p> $50 \div 10 =$ <p> <input type="radio"/> 3  <input type="radio"/> 6  <input type="radio"/> 5  <input type="radio"/> 4  <input type="radio"/> NH         </p>
<p><b>10</b></p> $\begin{array}{r} 8 \\ \times 3 \\ \hline \end{array}$ <p> <input type="radio"/> 18  <input type="radio"/> 21  <input type="radio"/> 27  <input type="radio"/> 24  <input type="radio"/> NH         </p>	<p><b>11</b></p> $\begin{array}{r} 66 \\ \times 7 \\ \hline \end{array}$ <p> <input type="radio"/> 522  <input type="radio"/> 422  <input type="radio"/> 143  <input type="radio"/> 452  <input type="radio"/> NH         </p>	<p><b>12</b></p> $\begin{array}{r} 16 \\ 27 \\ +42 \\ \hline \end{array}$ <p> <input type="radio"/> 74  <input type="radio"/> 84  <input type="radio"/> 85  <input type="radio"/> 75  <input type="radio"/> NH         </p>

Directions: Read each question carefully. Choose the correct answer and fill in the bubble. Mark NH if the answer is not here.

1 What fraction does this picture show?




- 3/8
- 5/8
- 3/5
- 1/8
- NH

2 What fraction does this picture show?



- 1/3
- 2/3
- 1/2
- 1/6
- NH

3 What fraction does this picture show?




- 2/5
- 1/6
- 1/5
- 5/6
- NH

4 What fraction does this picture show?




- 2/5
- 4/5
- 1/5
- 1/4
- NH

5 What fraction does this picture show?




- 6/12
- 5/12
- 7/12
- 5/7
- NH

6 What fraction does this picture show?




- 5/7
- 6/7
- 1/7
- 1/6
- NH

7 What fraction does this picture show?



- 4/5
- 1/3
- 1/4
- 3/4
- NH

8 What fraction does this picture show?

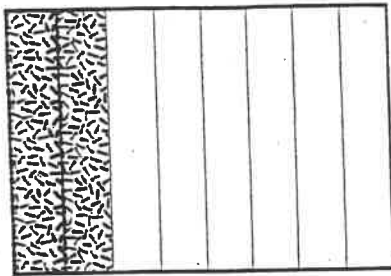


- 5/9
- 4/9
- 9/5
- 5/4
- NH

Directions: Read each question carefully. Choose the correct answer and fill in the bubble. Mark NH if the answer is not here.

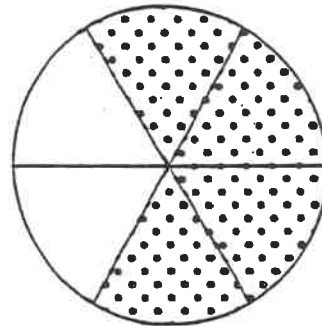
1 What fraction is shaded in this picture?

- 1/8
- 2/8
- 6/8
- 8/2
- NH




2 What fraction is shaded in this picture?

- 3/4
- 4/6
- 2/6
- 6/4
- NH



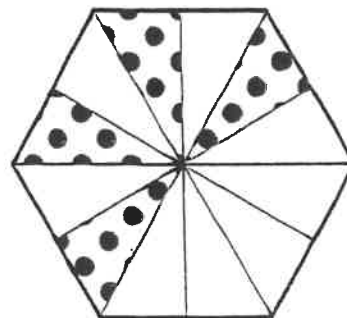
3 What fraction is shaded in this picture?

- 1/3
- 3/1
- 2/3
- 1/4
- NH



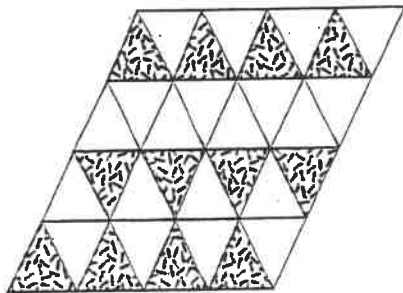
4 What fraction is shaded in this picture?

- 5/12
- 6/7
- 4/12
- 4/16
- NH




5 What fraction is shaded in this picture?

- 13/33
- 9/12
- 12/24
- 12/32
- NH



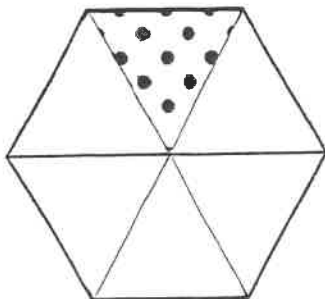
6 What fraction is shaded in this picture?

- 2/4
- 4/4
- 1/3
- 3/4
- NH



7 What fraction is shaded in this picture?

- 2/6
- 1/6
- 3/4
- 5/6
- NH



8 What fraction is shaded in this picture?

- 3/6
- 2/6
- 1/6
- 6/6
- NH

