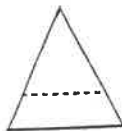


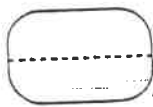
2 =

- ☐ $5 + 6 + 2$
- ☐ $50 + 60 + 2$
- ☐ $50 + 600 + 2$
- ☐ $500 + 60 + 2$

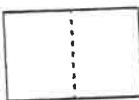
Which does not belong?



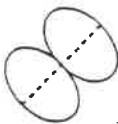
☐



☐



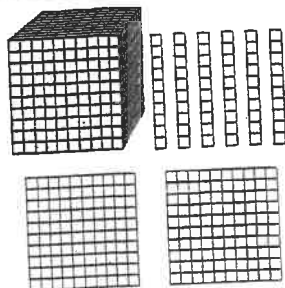
☐



☐

Kim and 5 friends went shopping. Kim bought six pairs of pants, 5 shirts, 3 sweaters, and 4 skirts. Write a solution sentence to show the total clothing items Kim bought.

$$\begin{array}{r} 862 \\ - 217 \\ \hline \end{array}$$



What numeral is shown?

Write the number sentence for the difference between 37 and 92.

Greg arrived at the museum at 8:00. He left at 11:30. How long was Greg at the museum?

Continue the pattern.
35, 31, 27, 23 ...

Use $>$ or $<$ to make each number sentence true.

1,204 ☐ 1,234

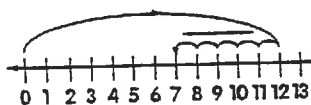
4,567 ☐ 4,757

33,210 ☐ 34,215

School books would weigh about

- ☐ 7 grams
- ☐ 5 liters
- ☐ 4 kilograms
- ☐ 5 kilometers

Write the number sentence shown on the number line.



$$\begin{array}{r} 961 \\ - 213 \\ \hline \end{array}$$

Movie Children Attending



Write 5 summary statements. = 4

Ron has a green shirt, a red shirt, and a blue shirt. He has black shorts, green shorts, and yellow shorts. How many different outfits can Ron make with these clothes?

About how much would it cost to buy a board game like Monopoly?

- ☐ 20¢
- ☐ \$20.00
- ☐ \$2.00
- ☐ \$200.00

2 red, 2 green, and 2 yellow pencils are in a can. Mom brings you two pencils. What is a possible combination of the two pencils she brings?

- ☐ 3 green
- ☐ 1 green and 1 orange
- ☐ 1 yellow and 1 red

30

orange brown yellow blue green

