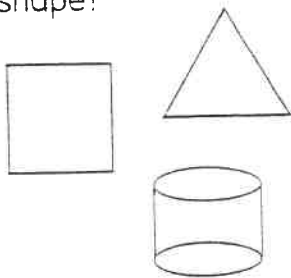


In 257, what numeral is in the tens place?

Which object is a three-dimensional shape?



Bill found 8 shells on the beach. His sister found six. How many shells did the two children find?

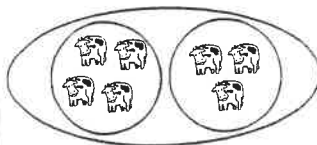
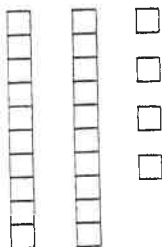
$$8 + 4 =$$

$$9 + 7 =$$

$$5 + 5 =$$

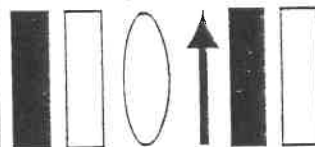
$$7 + 6 =$$

What number is shown? _____



Write a number sentence to describe the picture.

Jan earned 5 nickels on Friday and 7 dimes on Monday. How much money does she have?



Draw the next two shapes in the pattern.

35  74

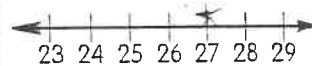
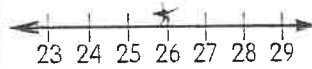
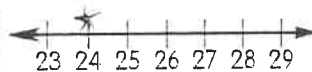
Which numeral is between 35 and 74?

- ☐ 34
- ☐ 63
- ☐ 81

About how many blocks tall is the flower?



Circle the number line that starts an even number greater than 25.



$$11 - 4 =$$

$$15 - 7 =$$

$$14 - 8 =$$

$$18 - 9 =$$

Soccer Goals Scored

Roy 5 goals

Jim 7 goals

Zak 3 goals

Who scored the least number of goals?

Who scored the most goals? _____


Jen planted 2 rows with 4 flowers in each row. Then she planted 1 row with 5 flowers in it. How many flowers did she plant?

Draw a picture on the back to show how to solve this problem.

About how long would it take to run a mile?

- ☐ 4 hours
- ☐ 2 days
- ☐ 1 hour
- ☐ ten minutes

What number is shown? _____

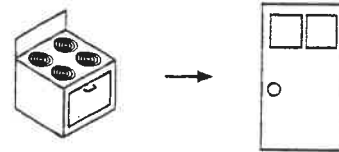


Giant Steps and Baby Steps

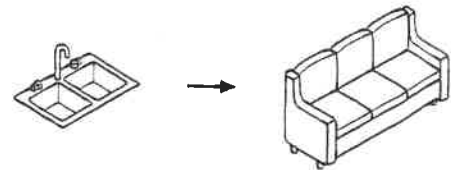
Are you using giant steps or baby steps? _____

Count the steps:

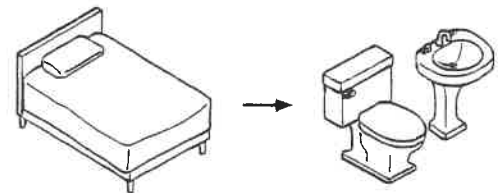
From the stove to the front door.



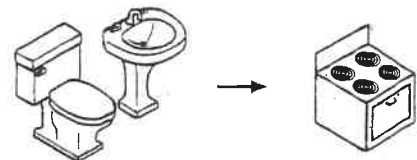
From the kitchen sink to the living room couch.



From your bed to the bathroom.



From the bathroom to the stove.



Measure other distances at home. Use giant steps or baby steps.
Write the results here.

I used _____ steps. (Fill in **giant** or **baby**.)

From _____ to _____ is _____.

From _____ to _____ is _____.

From _____ to _____ is _____.

From _____ to _____ is _____.