

WK 18  
th 4 today

Name \_\_\_\_\_

# 18


529 =

HUNDREDS	TENS	ONES

632 =

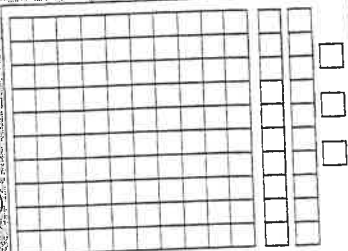
HUNDREDS	TENS	ONES

Put an X on the figure that does not belong with the others.



Jim's frog jumped 17 feet. Mark's turtle crawled 7 feet. Arnold's frog jumped 9 feet. What is the difference between the distances jumped by the frogs?

$$\begin{array}{r} 98 \\ - 38 \\ \hline \end{array}$$



This place value model shows \_\_\_\_\_ hundreds  
\_\_\_\_\_ tens  
\_\_\_\_\_ ones

$$0 + 8 = \square$$

$$8 + 0 = \square$$

$$8 - 0 = \square$$

$$8 - 8 = \square$$

Show one way to make 57¢.

Coin	How Many Needed
Pennies	_____
Nickels	_____
Dime	_____
Quarters	_____

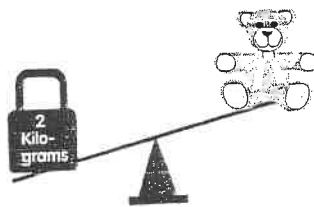
Continue this pattern.  
100, 200, 300, 400 ...

Continue counting by writing the next 2 numerals.

118, 119, \_\_\_\_\_

148, 149, \_\_\_\_\_

197, 198, \_\_\_\_\_



The teddy bear weighs **LESS or MORE** than 2 kilograms.  
Circle your answer.

Match.

- A. 57      B. 500  
C. 15      D. 159

fifteen \_\_\_\_\_

five hundred \_\_\_\_\_

fifty-seven \_\_\_\_\_

one hundred fifty-nine \_\_\_\_\_

$$\begin{array}{r} 45 \\ 32 \\ + 21 \\ \hline \end{array}$$

Student      Citizenship

Meg      ✓✓✓✓✓

Babs      ✓✓✓✓✓✓

Riki      ✓✓✓

Joe      ✓✓✓

Each ✓ = 2

How many more ✓s does Meg have than Riki? \_\_\_\_\_

Mystery Numbers:

$$A = 15 - 8$$

$$B = A - 1$$

$$C = A + B$$

$$A = \underline{\hspace{2cm}}$$

$$B = \underline{\hspace{2cm}}$$

$$C = \underline{\hspace{2cm}}$$

Round each number to the nearest 10.

7 \_\_\_\_\_

29 \_\_\_\_\_

16 \_\_\_\_\_

List the different 3-digit numerals you can make with 7, 9, 5.

Example: 795


\_\_\_\_\_  
\_\_\_\_\_  
\_\_\_\_\_

- No Homework  
Heroes! -

NAME \_\_\_\_\_

## Subtracting

On Tuesday, 174 people went swimming at  
Anderson Lake. On Wednesday, 213 people went  
swimming. How many more went swimming on  
Wednesday? \_\_\_\_\_



641	462	734	517	823	602
<u>-577</u>	<u>-103</u>	<u>-639</u>	<u>-408</u>	<u>-336</u>	<u>-225</u>

958	802	483	710	537	921
<u>-776</u>	<u>-630</u>	<u>-394</u>	<u>-512</u>	<u>-385</u>	<u>-872</u>

439	894	338	907	365	680
<u>-183</u>	<u>-780</u>	<u>-179</u>	<u>-520</u>	<u>-286</u>	<u>-147</u>

Find the differences.