

Math today

Name _____


17

Show 2 other names for 24.

- ☐ $20 + 4$
- ☐ 2 tens, 4 ones
- ☐ $40 + 2$
- ☐ 4 tens, 2 ones

How many ☐s does it take to go around this figure?


_____ ☐s



Senia has 18 charms. Latasha has 12 charms, and Barb has 9. How many more charms does Latasha have than Barb?

$$\begin{array}{r} 64 \\ - 12 \\ \hline \end{array}$$


How many ☐ to make



_____ ☐s

Write the related facts for $8 + 3 = 11$.

1 quarter + 1 dime + 1 nickel + 1 penny



Continue this pattern. 100, 90, 80, 70 ...

107 ☐ ☐ 135
Which numerals could go in the empty boxes?

- ☐ 93, 97
- ☐ 105, 112
- ☐ 109, 120

To measure the mass or weight of an object, use

- ☐ centimeters
- ☐ grams
- ☐ liters
- ☐ kilometers

Write the word for each numeral.

10 _____
100 _____
20 _____

$$\begin{array}{r} 96 \\ - 16 \\ \hline \end{array}$$

Student	Citizenship
Meg	✓✓✓✓✓
Babs	✓✓✓✓✓
Riki	✓✓✓
Joe	✓✓✓

Each ✓ = 2

How many points did Babs earn for citizenship? _____

Mystery Numbers

$$A = 8 + 8$$

$$B = A - 7$$

$$A = \underline{\hspace{2cm}}$$

$$B = \underline{\hspace{2cm}}$$

About how many students would be in 2 second-grade classes?

- ☐ 5 students
- ☐ 50 students
- ☐ 500 students

Using only 2 addends less than 10, write 4 different addition facts that equal 12.

NAME _____

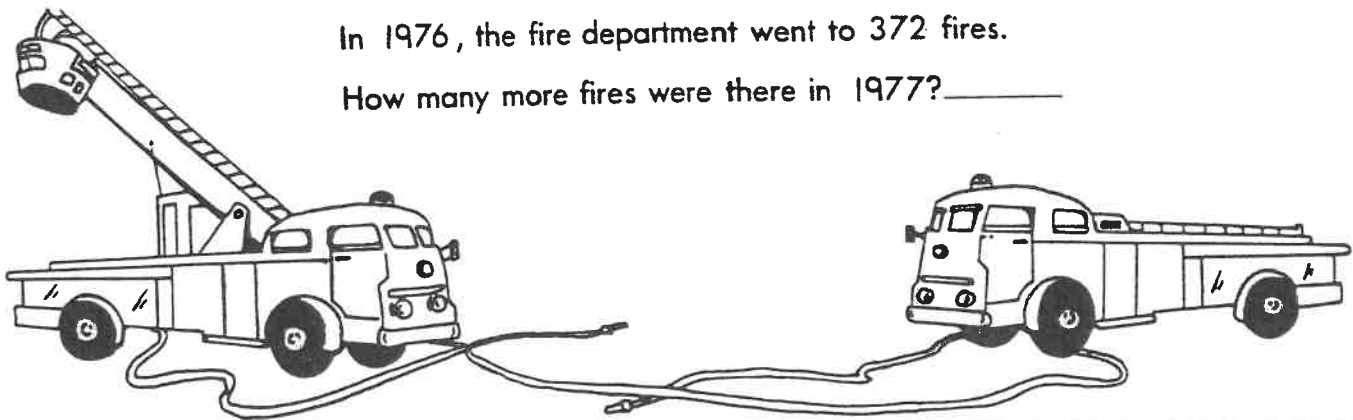
Subtraction review

- No Homework Hero
Allowed -

In 1977, the fire department went to 395 fires.

In 1976, the fire department went to 372 fires.

How many more fires were there in 1977? _____



$$\begin{array}{r} 972 \\ -329 \\ \hline \end{array}$$

$$\begin{array}{r} 47 \\ -33 \\ \hline \end{array}$$

$$\begin{array}{r} 856 \\ -465 \\ \hline \end{array}$$

$$\begin{array}{r} 511 \\ -220 \\ \hline \end{array}$$

$$\begin{array}{r} 18 \\ -9 \\ \hline \end{array}$$

$$\begin{array}{r} 74 \\ -53 \\ \hline \end{array}$$

$$\begin{array}{r} 29 \\ -16 \\ \hline \end{array}$$

$$\begin{array}{r} 769 \\ -568 \\ \hline \end{array}$$

$$\begin{array}{r} 54 \\ -47 \\ \hline \end{array}$$

$$\begin{array}{r} 391 \\ -237 \\ \hline \end{array}$$

$$\begin{array}{r} 82 \\ -63 \\ \hline \end{array}$$

$$\begin{array}{r} 170 \\ -85 \\ \hline \end{array}$$

$$\begin{array}{r} 454 \\ -398 \\ \hline \end{array}$$

$$\begin{array}{r} 63 \\ -37 \\ \hline \end{array}$$

$$\begin{array}{r} 202 \\ -159 \\ \hline \end{array}$$

$$\begin{array}{r} 35 \\ -8 \\ \hline \end{array}$$

$$\begin{array}{r} 681 \\ -240 \\ \hline \end{array}$$

$$\begin{array}{r} 96 \\ -74 \\ \hline \end{array}$$

Find the differences.